



# CREST Mathematics Olympiad (CMO) Worksheet *for*

**Class 1**



**Topic**  
**Time**



@crestolympiads




info@crestolympiads.com



+91-98182-94134

## Worksheet on Time

1. If it is 6 o'clock, where should the hour hand and minute hand point?



- a. The minute hand is on 10 and the hour hand is on 6.
- b. Both the minute and hour hands are at six.
- c. The minute hand is on 12 and the hour hand is on 6.
- d. The minute hand is on 1 and the hour hand is on 6.

2. What time does the clock show?



- a. 7:00
- b. 8:00
- c. 6:50
- d. 12:00

3. Fill in the blank:

We wake up in the \_\_\_\_\_ after a restful night.


- a. afternoon
- b. morning
- c. evening
- d. night

4. What do you think the clock shows when it's time for bed?



- a. 3:00 a.m.
- b. 11:00 a.m.
- c. 5:00 p.m.
- d. 10:00 p.m.

5. If the clock's minute hand is at 12 and the hour hand is at 4, what time is it?



- a. 12:40
- b. 12:04
- c. 4:12
- d. 4:00

**6. Find the time from this given clock.**

- a. quarter to six
- b. quarter past five
- c. half past six
- d. half past five


**7. Which of the following represents 2 hours?**

- a. 60 minutes + 60 minutes + 60 minutes
- b. 60 minutes + 60 minutes
- c. 60 minutes + 60 minutes + 60 minutes
- d. 60 minutes + 60 minutes + 60 minutes +60 minutes

**8. How many minutes are there in an hour?**

- a. 30
- b. 59
- c. 60
- d. 90

**9. What is the time shown on the clock?**



- a. quarter to 8
- b. quarter past 8
- c. quarter to 9
- d. quarter past 8

**10. Linda goes to the library at 5: 00 pm and leaves the library at 7:00 pm. How much time did she spend in the library?**

- a. 45 min
- b. 1 hr
- c. 2 hr
- d. 2 hr 30 min

11. Tim is eating his breakfast. Which of the following options aptly depicts the time on his wall clock?




- a. 7:30 am
- b. 12 pm
- c. 12 am
- d. 8 pm

12. At what time of the day will you eat lunch?

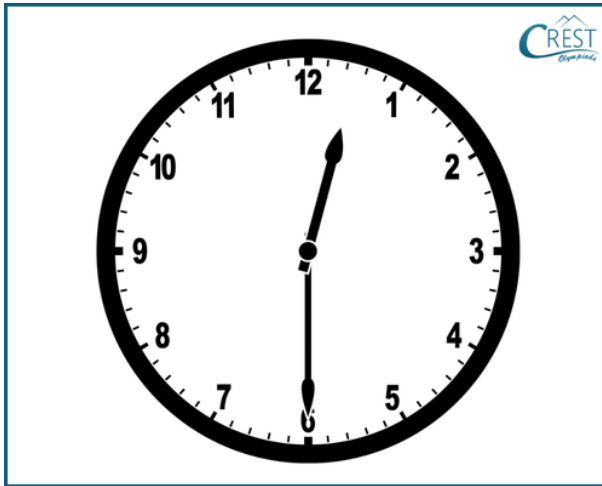
- a. morning
- b. afternoon
- c. evening
- d. night

13. George starts his Maths homework at 7:00 pm and completes it in half an hour. At what time did he finish his homework?



- a. 7:15 pm
- b. 7:30 pm
- c. 7:30 am
- d. 7:45 am

14. What is the time shown on the clock?



- a. 12:00
- b. 12:07
- c. 12:30
- d. 1:30


15. If Sara plays in the park from 5:30 p.m. to 7:00 p.m., for what duration did she play in the park?

- a. 45 min
- b. 1 hr
- c. 1 hr 15 min
- d. 1 hr 30 min

16. Bob starts his guitar practice at 5:00 pm and ends it in 45 minutes. At what time did he finish his guitar practice?

- a. 5:15 am
- b. 5:45 am
- c. 5:15 pm
- d. 5:45 pm


17. Alice's mother has gone for her morning walk. Which of the following options aptly depicts the time on the wall clock?



- a. 5:00 am
- b. 5:00 pm
- c. 5:12 am
- d. 5:12 pm

18. Fill in the blank:

The minute hand is showing \_\_\_\_ minutes



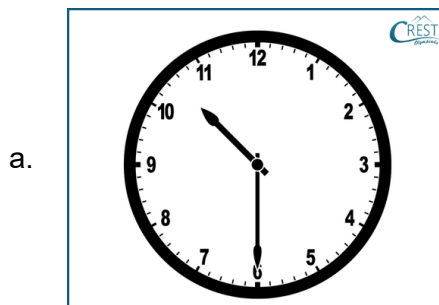
- a. 3
- b. 7
- c. 12
- d. 16

19. Fill in the blank:

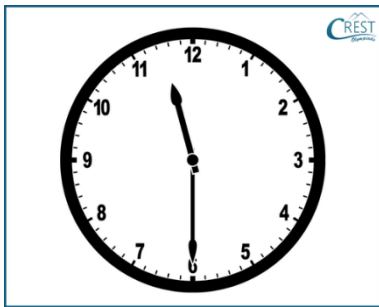
28 days make \_\_\_\_\_ weeks.

- a. 2
- b. 3
- c. 4
- d. 5

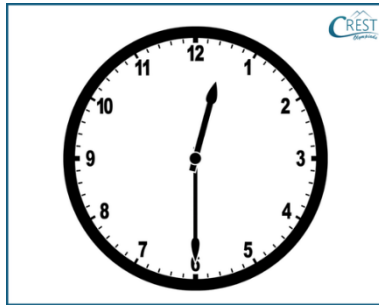
20. Which of the following clocks shows the time as 10:30?




b.



c.



d.



21. Peter takes 45 minutes to drive to his office. If he starts from his home at 8:20 am, at what time will he reach his office?



- a. 8:05
- b. 8:45
- c. 9:05
- d. 10:00



22. When the hour hand of the clock is between 3 and 4 and the minute hand of the clock is at 6, the time is \_\_\_\_\_.
- a. 2:30
  - b. 3:30
  - c. 6:10
  - d. 6:15
23. Sarah's school is at 6:00 am every weekday. She is delayed by 15 minutes today. At what time did she reach the school?
- a. 5:45 am
  - b. 6:15 am
  - c. 5:45 pm
  - d. 6:15 pm
24. If it is 2 hours past midnight, what is the time?
- a. 10:00 am
  - b. 2:00 am
  - c. 10:00 pm
  - d. 2:00 pm
25. Jim's piano classes happen every Monday and Friday. How many classes were conducted in the given month?



- a. 26
- b. 27
- c. 30
- d. 31

## Answer Key

1. c - If it is 6 o'clock, the minute hand should be at 12 and the hour hand at 6.



2. a - When the minute hand is at 12 and the hour hand is at 7 then the clock shows 7 o'clock.
3. b - We wake up in the morning after a restful night.
4. d - The image shows that the boy is sleeping in the dark.
5. d - If the minute hand is at 12 and the hour hand is at 4, it will be 4:00.
6. d
7. b
8. c
9. d
10. c
11. a
12. b
13. b
14. c
15. d
16. d
17. a

**18. b**

**19. c**

**20. a**

**21. c**

**22. b**

**23. b**

**24. b**

**25. a**



# Difference between Ordinary & Extra-Ordinary is that "Little Extra"

## Discover Our Ultimate Prep Kits!

### Buy Previous Years Papers

1. Login at [www.crestolympiads.com/login](http://www.crestolympiads.com/login)
2. Go to Dashboard -> Additional Practice -> Buy




### Buy Physical & Digital Workbooks at

<https://www.crestolympiads.com/olympiad-books>



### Buy Additional Practice

1. Login at [www.crestolympiads.com/login](http://www.crestolympiads.com/login)
2. After login, go to Dashboard -> Additional Practice -> Buy



@crestolympiads



info@crestolympiads.com



+91-98182-94134