



**CREST**  
*Olympiads*  
#CRESTInnovator

# CREST Science Olympiad (CSO) Worksheet *for*

**Class 1**



**Topic**

**Earth and Sky**



@crestolympiads




info@crestolympiads.com



+91-98182-94134

# Worksheet on Earth and Sky

1. Which of the following celestial bodies sparkles at night?




REST  
Olympiads

2. David looks up at the sky but sees no moon.

What phase of the moon does this indicate?

- a. Full moon
- b. Half moon
- c. New moon
- d. No moon

3. Which of the following statements is true about the objects shown in the picture?



- a. Both give us warmth.
- b. Both are colourful.
- c. Both are stars.
- d. Both are seen at night.

4. Consider the following statement.

**A: Planets revolve around the sun**

**B: All planets support life.**



Select the correct option.

- a. A is true. B is false.
- b. A is false. B is true.
- c. Both A and B are true.
- d. Both A and B are false.



5. Fill in the blank.

Plants need \_\_\_ to grow.



REST  
Olympiads

## Answer Key

1. b - Stars sparkle/twinkle at night.
2. c - When the moon disappears completely from the sky it is called a new moon.
3. c - Sun is also a star so statement c is correct.
4. a - Planets revolve around the sun but no planet other than Earth supports life.
5. b - Plants need the sun to grow.

**More Questions Coming Soon – Keep Learning!**





# Difference between Ordinary & Extra-Ordinary is that "Little Extra"

## Discover Our Ultimate Prep Kits!

### Buy Previous Years Papers

1. Login at [www.crestolympiads.com/login](http://www.crestolympiads.com/login)
2. Go to Dashboard -> Additional Practice -> Buy



### Buy Physical & Digital Workbooks at

<https://www.crestolympiads.com/olympiad-books>



### Buy Additional Practice

1. Login at [www.crestolympiads.com/login](http://www.crestolympiads.com/login)
2. After login, go to Dashboard -> Additional Practice -> Buy



@crestolympiads



info@crestolympiads.com



+91-98182-94134