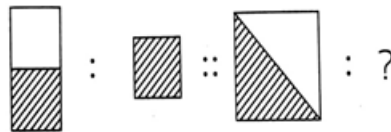


Syllabus for CRO is available at <https://www.crestolympiads.com/cro-syllabus>

Pattern and Marking Scheme

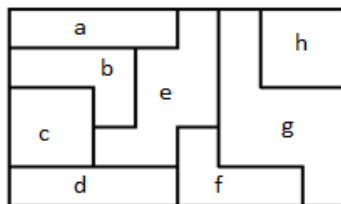
Class	Topic/Section	No. of Questions	Marks per Questions	Total Marks
1 st to 4 th	Logical Reasoning	25	1	25
	Achiever's Section	10	2	20
	Grand Total	35	-	45
5 th to 10 th	Logical Reasoning	40	1	40
	Achiever's Section	10	2	20
	Grand Total	50	-	60

1. Complete the second pair by choosing a figure from the given alternatives:



- (a) (b)
- (c) (d)

2. Which shape has the maximum number of sides?



- (a) g (b) b
(c) e (d) d

CREST Olympiads – A digital initiative to enhance practical knowledge

3. Calculate the length of the blue car if each red car measures 40 cm. Convert your answer in meter.



- (a) 200m
(b) 100m
(c) 2m
(d) 1m
-

4. What will come at the place of question mark?



- (a) 32
(b) 64
(c) 216
(d) 514
-

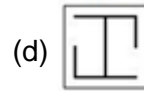
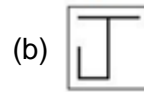
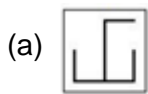
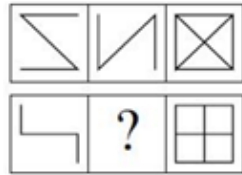
5. Monika drew a face as shown below. Count the number of circles in the given image.



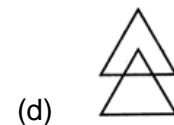
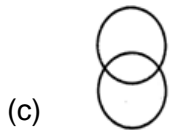
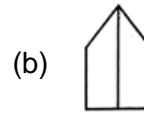
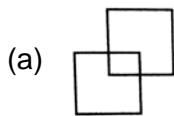
- (a) 7
(b) 6
(c) 8
(c) 5
-

CREST Olympiads – A digital initiative to enhance practical knowledge

6. Complete the series:



7. Identify the odd one out:



8. If Delhi is called Agra, Agra is called Mumbai and Mumbai is called Kolkata, then which city is the capital of India?

- (a) Kolkata
(c) Delhi

- (b) Agra
(d) Mumbai

Achiever's Section


9. If there are 10 students in the class, Rekha is 2nd from the last and Nidhi is 3rd from the start, then how many girls are between Rekha and Nidhi?

- (a) 5
(c) 6

- (b) 8
(d) 7

CREST Olympiads – A digital initiative to enhance practical knowledge

10. Group the given figures into three classes using each figure only once.



(a) 1-7-8, 2-4-9, 3-5-6

(b) 1-3-7, 2-4-6, 5-8-9

(c) 1-7-9, 2-3-4, 5-6-8

(d) 1-3-7, 2-4-9, 5-6-8

Answers

1. (a), 2. (c), 3. (c), 4. (d), 5. (a), 6. (d), 7.(b), 8.(b), 9. (a), 10. (d)