



## CREST Science Olympiad (CSO)

Previous Year Paper (2023-24)

**Class KG (Set - A)**

**Time Allowed: 45 minutes**

**Maximum Marks: 30**

- Additional **10 minutes** will be allotted to fill up information on the OMR Sheet, before the start of the exam.
- Fill in all the mandatory fields clearly on the OMR Sheet.
- There are a total of **25 questions** in this booklet comprising **2 sections** namely the **Practical Science & Achievers' Section** consisting of **20 questions (1 mark each) & 5 questions (2 marks each)** respectively.
- There is no negative marking. The use of a calculator is not permitted.
- There is **only ONE correct option** to a given question.
- Use **HB Pencil / Ball point pen (Blue / Black) only** for marking the correct choice of answers on the OMR Sheet.
- Rough work is to be done in the space provided in the test booklet. Extra plain sheet may be provided by the school for the rough work.
- The OMR Sheet is to be handed over to the invigilator at the end of the exam.
- No candidate is allowed to carry any textual material, printed or written, bits of paper, any electronic device, digital watches, etc. inside the examination hall.
- The use of unfair means may result in the cancellation of the exam. Any such instances must be reported at **+91-98182-94134** or **info@crestolympiads.com**

**DO NOT OPEN THIS BOOKLET UNTIL ASKED TO DO SO**

**FILL IN THE DETAILS**

Candidate Name: \_\_\_\_\_

Class: \_\_\_\_\_ Section: \_\_\_\_\_

CREST ID: \_\_\_\_\_

## Practical Science (Each Question is 1 Mark)

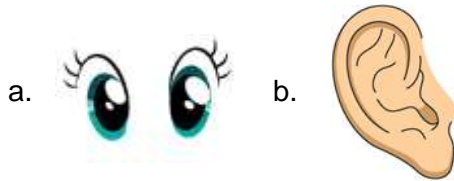
1. Identify the animal:



- a. Camel                      b. Horse


2. Fill in the blank:

\_\_\_ helps us to hear the music.

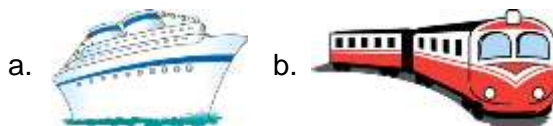


3. Fill in the blank:

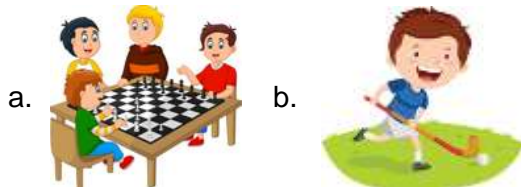
\_\_\_\_\_ is an unhealthy food



4. Identify the water transport:



5. Identify the indoor game:



6. Which season is represented by the given picture?



- a. Summer                      b. Winter

7. Identify the winter season:



8. What kind of transport is shown here?




- a. Land                              b. Air

9. The given picture represents what kind of pollution?



- a. Noise                              b. Water

10. Select the vegetable brinjal from the given images:



11. Fill in the blank:

\_\_\_\_\_ is a young one of a cow.



- a. calf                                      b. puppy

12. Identify the name of the animal:



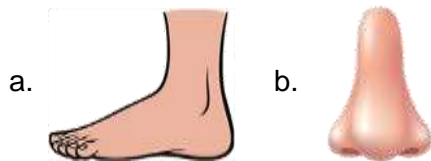
- a. Monkey      b. Tiger

13. Identify the name of the fruit shown:



- a. Mango      b. Grapes

14. What helps us to walk?



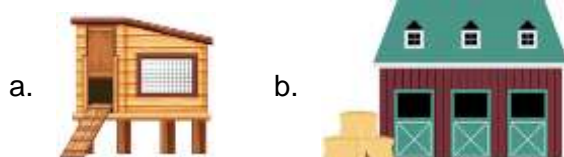
- a.      b.

15. We keep the given object in our \_\_\_\_\_.



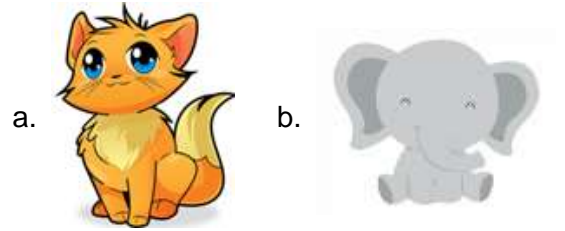
- a. bathroom      b. drawing room

16. Where does a horse live?



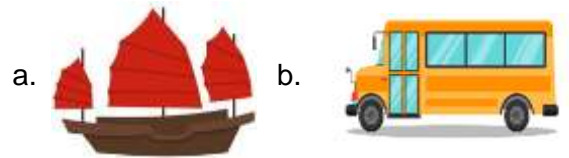
- a.      b.

17. Which one is a pet animal?



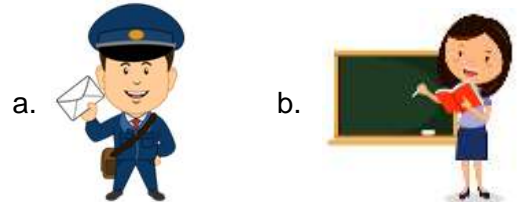
- a.      b.

18. Identify the land transport:



- a.      b.

19. Who teaches you in school?



- a.      b.

20. We use umbrella in which season?



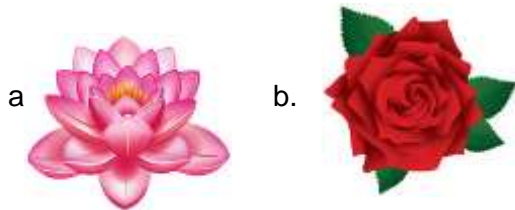
- a. Autumn season  
b. Rainy

## Achievers' Section (Each Question is 2 Marks)

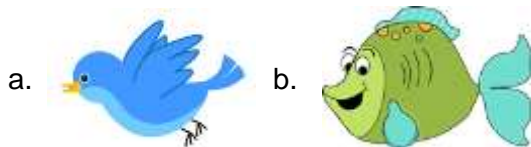
21. Where does your mother cook the food?



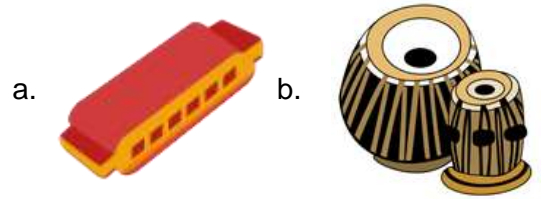
22. Identify the lotus:



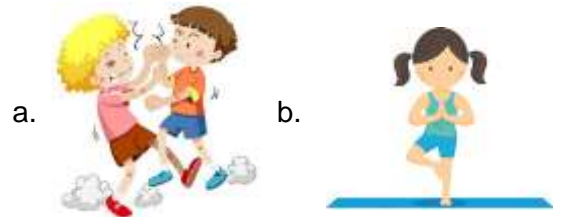
23. Select the one who lives in water:



24. Which one is a harmonica?



25. Identify the good habit:



### Answer Key

1.	b	2.	b	3.	a	4.	a	5.	a	6.	a	7.	a
8.	a	9.	b	10.	b	11.	a	12.	a	13.	b	14.	a
15.	a	16.	b	17.	a	18.	b	19.	b	20.	b	21.	b
22.	a	23.	b	24.	a	25.	b						